

Magadal Kitam a Magkuenta

$$4 + 1 = 5$$



7

3

2

5

6

4

2

+

3

5

2



7

8

4

9

$$5 + 2 = 7$$

5

Dupaninan Agta

Magadal Kitam a Magkuenta

Let Us Learn Math



SUMMER INSTITUTE OF LINGUISTICS

Translators

Publishers

1999

Published
in cooperation with the
Commission on Philippine Languages
and the
Department of Education, Culture and Sports
Manila, Philippines

Additional copies of this publication
may be obtained from:
The Book Depository
P.O. Box 2270 CPO
1099 Manila

This book or any part thereof may be copied or adapted and reproduced for use by any entity of the Department of Education, Culture and Sports without permission from the Summer Institute of Linguistics. If there are other organizations or agencies who would like to copy or adapt this book we request that permission first be obtained by writing to:

Summer Institute of Linguistics
P.O. Box 2270 CPO
1099 Manila

Math Book in
Eastern Cagayan Dupaninan Agta

75.6-799-2C

62.20P-995014N

ISBN 971-18-0341-0

Printed in the Philippines
SIL Press



REPUBLIC OF THE PHILIPPINES
DEPARTMENT OF EDUCATION, CULTURE AND SPORTS
Meralco Avenue, Pasig, Metro Manila

OFFICE OF THE SECRETARY

Foreword


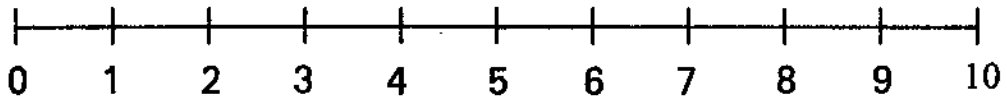
The islands, forests, and mountains of our country are home to many distinct cultural communities, each with its own language and tradition. Their cultures are integral pieces of the beautiful mosaic that is the Filipino nation.

We owe a debt of gratitude to our countrymen from the cultural communities. Through the centuries their customs, languages, and noble spirit have contributed to the development of our national character. As we gain greater understanding of these cultures, we can only take greater pride in the remarkable richness of our Filipino heritage.

For these reasons, it is imperative that the languages and traditions of the Filipino cultural communities be preserved. This book, in the language of a cultural community, is intended to assist in that preservation. It is designed to build reading and comprehension skills and to expand knowledge through the medium of the reader's own language. This first language approach to learning builds pride in the mother tongue and makes reading a rewarding experience. The skills and confidence thus acquired help equip the reader to pursue further education in the national language.

The Department of Education, Culture and Sports is pleased to introduce this book, the most recent in a series designed to promote literacy in the cultural communities. In serving these communities, the good of the entire nation is served.

Andrew Gonzales
ANDREW GONZALEZ, FSC
Secretary



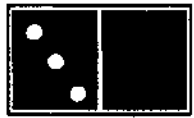
1

Handwriting practice lines for the number 1.



2

Handwriting practice lines for the number 2.




3

Handwriting practice lines for the number 3.



4

Handwriting practice lines for the number 4.





5

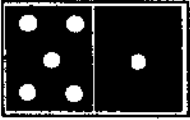
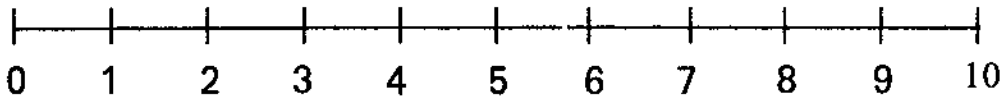
Handwriting practice lines for the number 5.

Hangan ngamin hidi?

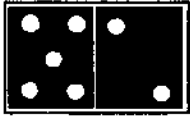


Hangan ngamin hidi?

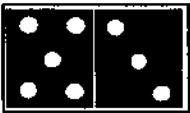





6



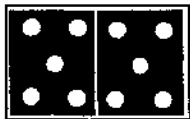
7



8




9




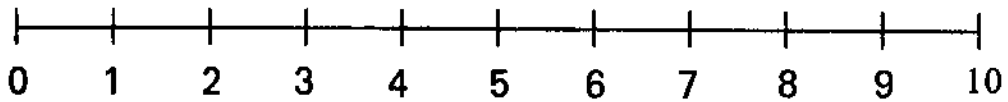
10

Hangan hidi ngamin a manok?



Hangan hidi ngamin a papa onu pato?





Nagadal hidi anak, panggep ha sabali a kagi. Hangan i babbey?
 Hangan i lallaki? Hangan hidi ngamin?



$$2 + 1 = 3$$

Tabbegam moy daginde numero
 aye ket magnayon onu magdagum.

$$\begin{array}{r} 2 \\ + \\ \hline 1 \end{array}$$

$$\begin{array}{r} 1 \\ + \\ \hline 1 \end{array}$$

$$\begin{array}{r} 2 \\ + \\ \hline 0 \end{array}$$

$2 + 1 =$

$1 + 1 =$

$2 + 0 =$

$$\begin{array}{r} 0 \\ + \\ \hline 1 \end{array}$$

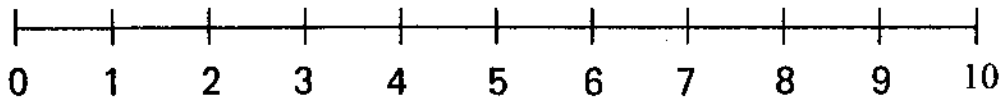
$$\begin{array}{r} 1 \\ + \\ \hline 2 \end{array}$$

$$\begin{array}{r} 2 \\ + \\ \hline 1 \end{array}$$

$0 + 1 =$

$1 + 2 =$

$2 + 1 =$



Panggep idi panagdagum onu panagnayon:

Atoy esa a bibi ni Embang ket tallo manon a anak na a lalaki a dakal dan. Hangan hidi ngamin anak na?



$$3 + 1 = 4$$

Magnayon onu magdagum hikuna bila ha ontok na.


$$\begin{array}{r} 3 \\ + \\ \hline 1 \end{array}$$

$$\begin{array}{r} 2 \\ + \\ \hline 2 \end{array}$$


$$\begin{array}{r} 1 \\ + \\ \hline 2 \end{array}$$

$$\begin{array}{r} 3 \\ + \\ \hline 2 \end{array}$$

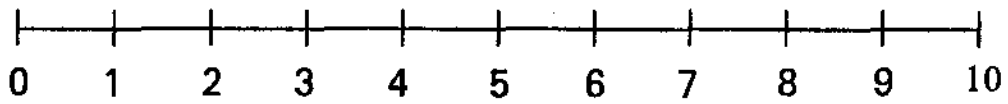
$$\begin{array}{r} 2 \\ + \\ \hline 3 \end{array}$$



_____ Hangan i kotsara?



_____ Hangan i don?



$$\begin{array}{r} 1 \\ + \\ \hline 1 \end{array}$$

$$\begin{array}{r} 3 \\ + \\ \hline 1 \end{array}$$

$$\begin{array}{r} 2 \\ + \\ \hline 3 \end{array}$$

$$\begin{array}{r} 0 \\ + \\ \hline 2 \end{array}$$

$$\begin{array}{r} 4 \\ + \\ \hline 1 \end{array}$$

$$\begin{array}{r} 3 \\ + \\ \hline 0 \end{array}$$

$$\begin{array}{r} 3 \\ + \\ \hline 2 \end{array}$$

$$\begin{array}{r} 2 \\ + \\ \hline 1 \end{array}$$

$$1 + 2 =$$

$$5 + 0 =$$

$$0 + 4 =$$

$$2 + 2 =$$

Ginumatang ni Manang Ogay ha tallo nga sako a bagas iho ha sentro. Ket ginumatang manon hikuna ha esa nga sako a asokar hangan ngamin a sako?

$$\begin{array}{r} \underline{\hspace{2cm}} \\ + \\ \hline \end{array}$$



Inumangay ni Botay ha sentro a magereyok ha bagas. Linumapos hikuna ket nakilugan ha 4 a ugden ket 3 pay a Agagta, hangan hidi ngamin?



$$5 + 3 =$$

_____ Hangan ngamin i lugan a mainta moy?

$$\begin{array}{r} 3 \\ + \\ \hline 3 \end{array}$$

$$\begin{array}{r} 4 \\ + \\ \hline 2 \end{array}$$

$$\begin{array}{r} 5 \\ + \\ \hline 3 \end{array}$$

$$\begin{array}{r} 6 \\ + \\ \hline 1 \end{array}$$

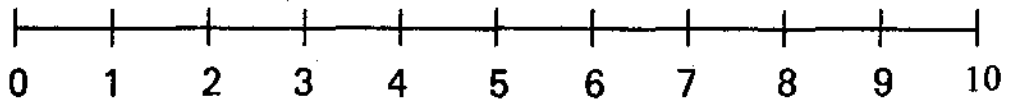
$$\begin{array}{r} 7 \\ + \\ \hline 2 \end{array}$$

Maggimet a 3 a saba ken 3 a papaya ket bilangan moy.

Hangan ngamin hidi? _____

Maggimet ha 2 a okong ken 6 a don na giwad ken bilangan moy.

Hangan ngamin hidi? _____



Ni Kakay ko nagpotad ha kayo para ipagdokot na. Pinutad na i 4 a attidog a kayo ken ninayonan na pay ha lima a kayo. Hangan ngamin a kayo i pinutadputad na?



$$4 + 5 =$$

_____ Hangan hidi ngamin a kayo?

$$\begin{array}{r} 4 \\ + \\ \hline 5 \end{array}$$

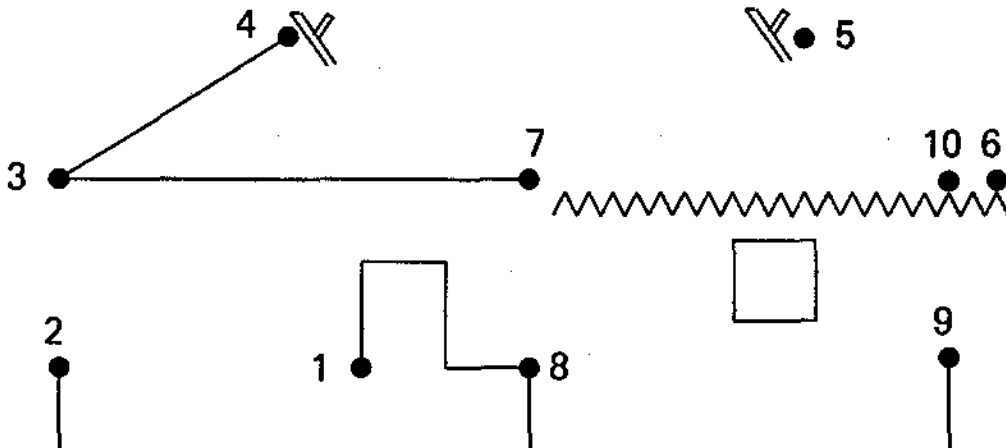
$$\begin{array}{r} 4 \\ + \\ \hline 3 \end{array}$$

$$\begin{array}{r} 5 \\ + \\ \hline 5 \end{array}$$

$$\begin{array}{r} 4 \\ + \\ \hline 4 \end{array}$$

$$\begin{array}{r} 5 \\ + \\ \hline 4 \end{array}$$

Iselpo moy i numero onu lingyaan hanggan ha essa a pulo. Kada tolnak na numero ihay pangeselpowam moy ha lingya na. Anya i ginemit moy?



Plas, kunahe i singyal na +, i kagiyang na panagdagum onu panag-nayon.

Intan moy ha kanawan, ken entam moy bila ha ontok. Magtagbu hidi nu magnayon onu magdagum kam.

+	0	1	2	3	4	5	6	7	8	9
0	0	1	2	3	4	5	6	7	8	9
1	1	2	3	4	5	6	7	8	9	
2	2	3	4	5	6	7	8	9		
3	3	4	5	6	7	8	9			
4	4	5	6	7	8	9				
5	5	6	7	8	9					
6	6	7	8	9						
7	7	8	9							
8	8	9								
9	9									

Magadal kitam ket tabeggan tam daginde.

$$\begin{array}{r} 4 \\ + \\ \hline 5 \end{array}$$

$$\begin{array}{r} 4 \\ + \\ \hline 4 \end{array}$$

$$\begin{array}{r} 3 \\ + \\ \hline 5 \end{array}$$

$$\begin{array}{r} 1 \\ + \\ \hline 1 \end{array}$$

$$\begin{array}{r} 5 \\ + \\ \hline 5 \end{array}$$

$$\begin{array}{r} 9 \\ + \\ \hline 0 \end{array}$$

$$\begin{array}{r} 1 \\ + \\ \hline 4 \end{array}$$

$$\begin{array}{r} 3 \\ + \\ \hline 4 \end{array}$$

$$\begin{array}{r} 2 \\ + \\ \hline 1 \end{array}$$

$$\begin{array}{r} 6 \\ + \\ \hline 2 \end{array}$$

$$\begin{array}{r} 7 \\ + \\ \hline 2 \end{array}$$

$$\begin{array}{r} 8 \\ + \\ \hline 0 \end{array}$$

$$\begin{array}{r} 3 \\ + \\ \hline 2 \end{array}$$

$$\begin{array}{r} 5 \\ + \\ \hline 2 \end{array}$$

$$\begin{array}{r} 6 \\ + \\ \hline 3 \end{array}$$

$$\begin{array}{r} 3 \\ + \\ \hline 1 \end{array}$$

$$\begin{array}{r} 7 \\ + \\ \hline 1 \end{array}$$


$$\begin{array}{r} 3 \\ + \\ \hline 3 \end{array}$$

$$\begin{array}{r} 4 \\ + \\ \hline 5 \end{array}$$

$$\begin{array}{r} 1 \\ + \\ \hline 3 \end{array}$$

Maynus, i singyal na kunahe —panagalap onu panagadya.

Iborek i tabbeg moy ihay sidong na lingya, ken iborek moy itabbeg moy ha lingya onu ha blangko na lengya.



$$3 - 2 =$$

_____ Hangan a manok i naentam?

$$\begin{array}{r} 3 \\ - \\ \hline 1 \end{array}$$

$$\begin{array}{r} 4 \\ - \\ \hline 1 \end{array}$$

$$\begin{array}{r} 4 \\ - \\ \hline 2 \end{array}$$

$$\begin{array}{r} 5 \\ - \\ \hline 1 \end{array}$$

Maggimet ha upat a bola.
(Magdrawing)


Libotam moy i tallo, hangan i
awan nalibotan? _____

Maggimet ha upat a okong.
(Magdrawing)

Libotam moy i duwa, hangan
ngamin i awan nalibotan? _____

Panggep ide panagadya onu panagalap:

Atoy enem nga banga ni Nenukit napukaw i tallo a banga hangan i natehak?



_____ Hangan hidi ngamin nga banga a naentam nga natehak?

Esa nga pulo hidi nga Agta a nangpadas a naganos nga magtaltalon ngem nagadya i lima, hangan i natehak?



_____ Hangan hidi ngamin nga Agta?

Atoy enem nga ugden a nagsaksaket, tallo nga ugden i linumakad iho ha sentro na Gattaran penu maagasan, hangan i natehak?



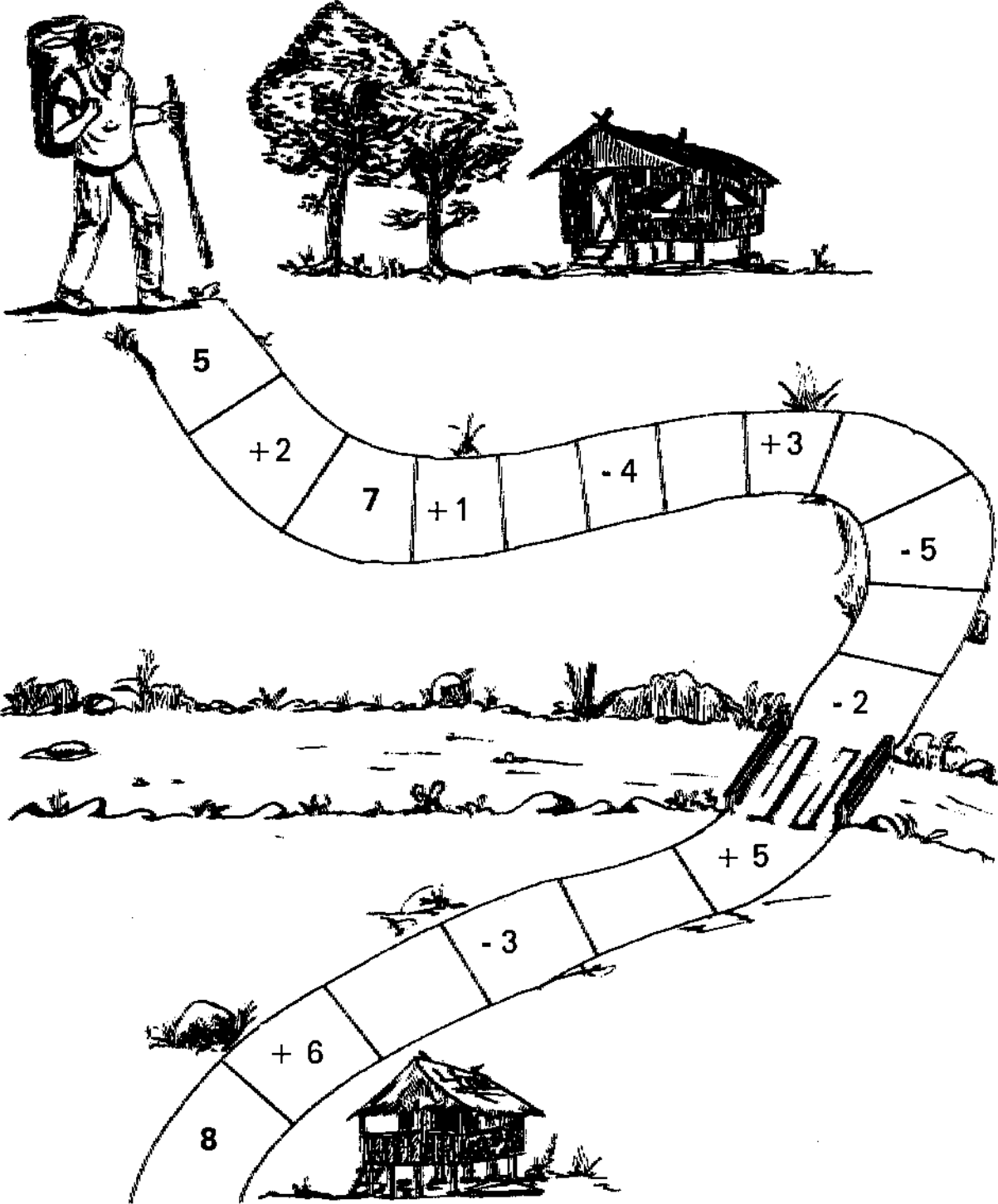
_____ Hangan hidi ngamin nga ugden?

Maynus onu panagallap.

Ereyokam moy ha kanawan ken intam moy ha ontok bila. Ket magtagbo hidi ide kusto nga numero nu magadya onu alap.

—	0	1	2	3	4	5	6	7	8	9
0	0									
1	1	0								
2	2	1	0							
3	3	2	1	0						
4	4	3	2	1	0					
5	5	4	3	2	1	0				
6	6	5	4	3	2	1	0			
7	7	6	5	4	3	2	1	0		
8	8	7	6	5	4	3	2	1	0	
9	9	8	7	6	5	4	3	2	1	0

Magbiyahe kam onu maglakad kam megipu ha ontok hanggan makusto i sungbat mo? 8 hikuna?



Bilangan tam, daginde numero megiyu 1 hanggan 20.

1 2 3 4 5 6 7 8 9 10
11 12 13 14 15 16 17 18 19 20

Ituloy moy a magbilang hanggan 20 ken iborek idende kahon.

1	2								

Magadal ha numero. Hikuna a agum moy epeta na i numero ken hikaw nga agum na libotam moy i numero nga nepeta na.

12	6	10	20
15	11	14	18
9	19	17	16
13	3	8	18

Bilangan tam, daginde numero megipu 1 hanggan 110.

1	2	3	4	5	6	7	8	9	10
11	12	13	14	15	16	17	18	19	20
21	22	23	24	25	26	27	28	29	30
31	32	33	34	35	36	37	38	39	40
41	42	43	44	45	46	47	48	49	50
51	52	53	54	55	56	57	58	59	60
61	62	63	64	65	66	67	68	69	70
71	72	73	74	75	76	77	78	79	80
81	82	83	84	85	86	87	88	89	90
91	92	93	94	95	96	97	98	99	100
101	102	103	104	105	106	107	108	109	110

Ituloy moy a magborek ha kada kahon ha mumero hanggan mapotat.

1	2	3							
				25					
									50

Iborek i umunod a numero.

Iborek i numero sakbay, idi numero a neborek dan.

15 _____

_____ 18

22 _____

_____ 21

30 _____

_____ 93

67 _____

_____ 55

73 _____

_____ 30

19 _____

_____ 76

98 _____

_____ 12

Iborek i numero a umunod ha 19 onu lobuk na 19 ken 21.

19 _____ 21

55 _____ 57

38 _____ 40

40 _____ 42

64 _____ 66

86 _____ 88

Ide i Calendaryo. Iborek i numero a kurang na para makompleto. Ken iborek moy bila idende nagen ha pamalak.

MONTH						
Domingo	Lunes					
		1	2	3	4	5
6		8		10	11	
13	14		16	17		19
	21	22	23		25	26

Ni Kakay ken ni Besang immangay nagbisita ha Magi. Dimmetang hidi ha Magi Hulyo 3 ken nagsoli hidi Hulyo 9. Hangan ha aldew a natdog hidi ha Magi ayo?

$$\begin{array}{r}
 9 \\
 - \\
 \hline
 3 \\
 \hline
 \hline
 \hline
 \end{array}$$

Dagendi nagen na bulan, onudan moy ken iborek ha lingya.

- Enero _____
- Pebrero _____
- Marso _____
- Abril _____
- Mayo _____
- Hunyo _____
- Hulyo _____
- Agosto _____
- Septembre _____
- Oktobre _____
- Nobimbre _____
- Disyembre _____

Daginde nagen na aldew, onudan moy ken iborek ha lingya.

- Lunes _____
- Martes _____
- Myerkoles _____
- Webes _____
- Byernes _____
- Sabado _____
- Domingo _____

Any a i tawen tam niyaen? _____

Any a nga bolan ken any a nga aldew? _____



Atoy inem nga tasa a gatas ni Bening, ngem atoy pala nakadagum nga bisita a dinumemat nga upat a hidi. Hangan ngamin nga tasa ha gatas i iyatad na?



$$6 + 4 =$$

_____ Hangan hidi ngamin?

6	5	3	8	9	8
+	+	+	+	+	+
<u>4</u>	<u>5</u>	<u>7</u>	<u>1</u>	<u>1</u>	<u>2</u>

Atoy esa a pulo a Agta a linomakad a magbahot ngem nagadya i duwa giputa nangan pala, hangan hidi a nagbahot?




$$10 - 2 =$$

_____ Hangan hidi ngamin?

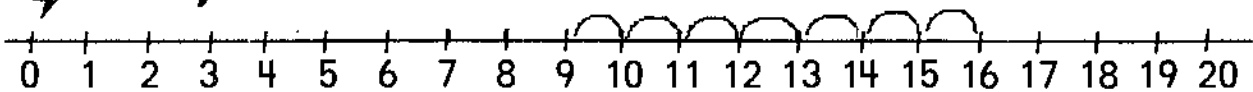
10	10	10	10	10	10
—	—	—	—	—	—
<u>2</u>	<u>5</u>	<u>7</u>	<u>1</u>	<u>3</u>	<u>6</u>

Intan moy idendi a nakalingya a numero. Ken mangrugi ha ika siyam maglaktong ka ha pitu a laktong. Ken i ikapitu a laktong iday i tabbeg na.



$$9 + 7 =$$

_____ Hangan ngamin i padot?

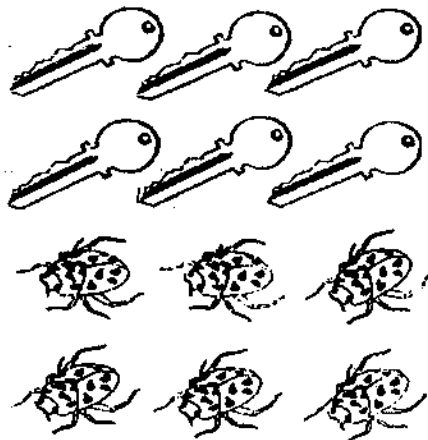


6	6	6	6	6
+	+	+	+	+
<u>6</u>	<u>8</u>	<u>5</u>	<u>7</u>	<u>9</u>

Hangan i tolbek? _____

Hangan i barengaw? _____

Hangan hidi ngamin? _____



Hangan i tasa? _____

Hangan i tarong? _____

Hangan hidi ngamin? _____

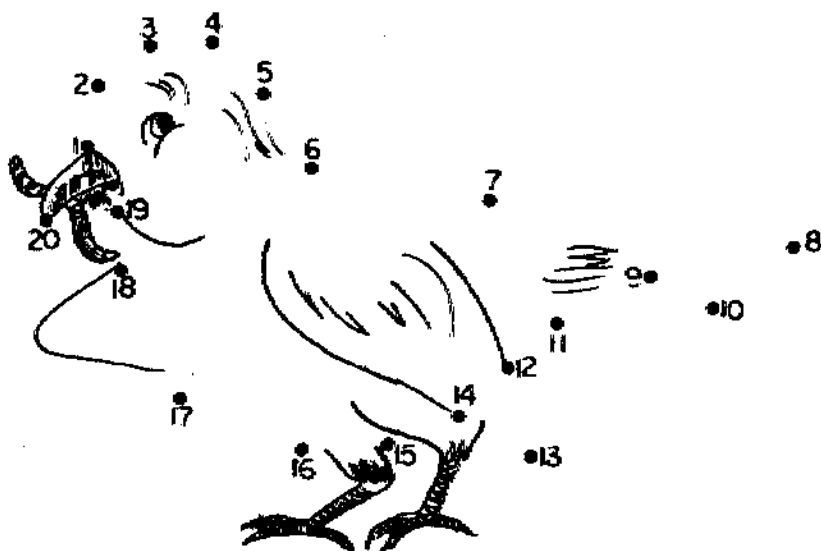
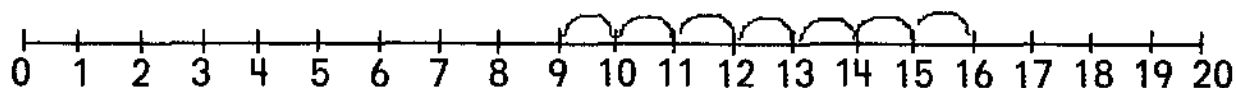


Naglakad ni Korina a nageriyok ha saba, nakaenta hikuna ha seyam,
 ken ni Erning ha 7 hangan ngamin a saba i naereyokan di.



$$9 + 7 =$$

_____ Hangan ngamin i saba?

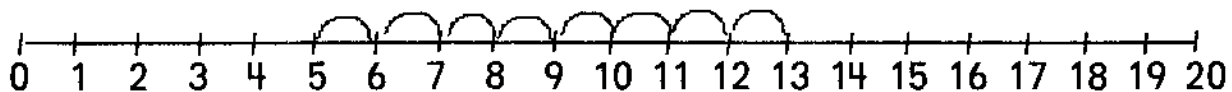


Makpal a tolay a immangay ha bilay ni Somper. Ket napotat dan i bilay na ha totolay. Lima hidi a biseta na a tolay ken 8 bila hidi a anak a nainayon, hangan hidi ngamin?



$$5 + 8 =$$

_____ Hangan hidi ngamin?



8	8	8	8	8	8	8
+	+	+	+	+	+	+
<u>5</u>	<u>6</u>	<u>4</u>	<u>8</u>	<u>3</u>	<u>9</u>	<u>7</u>

9	9	9	9
+	+	+	+
<u>2</u>	<u>4</u>	<u>6</u>	<u>8</u>

9	9	9	9
+	+	+	+
<u>5</u>	<u>9</u>	<u>3</u>	<u>7</u>

Magadal kitam ha pagdagum ken songbatan tam daginde ngamin.

$1 + 1 =$

$1 + 2 =$

$1 + 3 =$

$1 + 4 =$

$1 + 5 =$

$1 + 6 =$

$1 + 7 =$

$1 + 8 =$

$1 + 9 =$

$2 + 2 =$

$2 + 3 =$

$2 + 4 =$

$2 + 5 =$

$2 + 6 =$

$2 + 7 =$

$2 + 8 =$

$2 + 9 =$

$3 + 3 =$

$3 + 4 =$

$3 + 5 =$

$3 + 6 =$

$3 + 7 =$

$3 + 8 =$

$3 + 9 =$

$4 + 4 =$

$4 + 5 =$

$4 + 6 =$

$4 + 7 =$

$4 + 8 =$

$4 + 9 =$

$5 + 5 =$

$5 + 6 =$

$5 + 7 =$

$5 + 8 =$

$5 + 9 =$

$6 + 6 =$

$6 + 7 =$

$6 + 8 =$

$6 + 9 =$

$7 + 7 =$

$7 + 8 =$

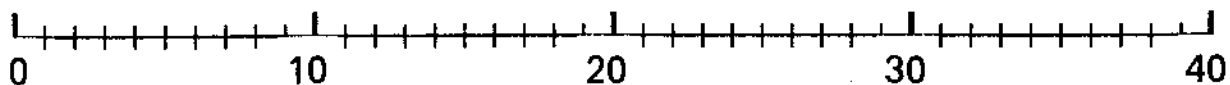
$7 + 9 =$

$8 + 8 =$

$8 + 9 =$

$9 + 9 =$

Kunahe i magbilang ha sagesa a pulo.



Iborek hidi a numero a umunod, ihay ha ontok a lingya. Magbilang ha sagesa a pulo.

10, 20, 30, __, __, __, __, __, __, 100

Nelako ni Aking i bokel na kapi. I bali na kapi 10, ngem denobli na i paglako ha mameng upat hangan i bali na ngamin ha kapi?

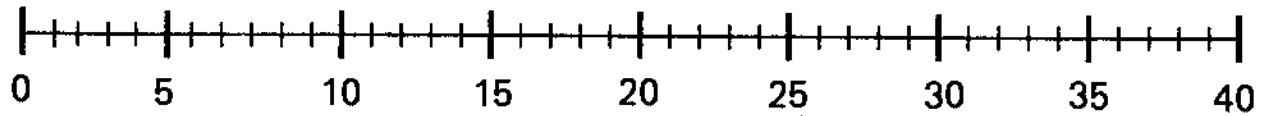
_____ Hangan ngamin i bali na?

Ni Benning kayat na maggatang ha tenon. I bali na 80, hangan a sagdedyes i otsenta pesos?

_____ Hangan nga sagdedyes i otsenta?



Kunahe i magbilang a sagle-lema.



Putatam onu tabbegan idende blanko. No magbilang ka ha saglema anya i umunod ha 15 nu saglelema?

5, 10, 15, ____, 25, ____, 35,
____, 45, 50, ____, 60, ____, 70,
____, 80, ____, ____, 95, 100

Ni Aka Doming ginumatang ha diket. I bali na 20.00 pesos. Hangan nga sagilema i baynte?

_____ Hangan a saglema i 20.00 pesos?

Ni kayong Loloy naglako ha kapaya. I bali na 5.00 pesos. Atoy kapaya na a upat hangan hidi ngamin nu melako?

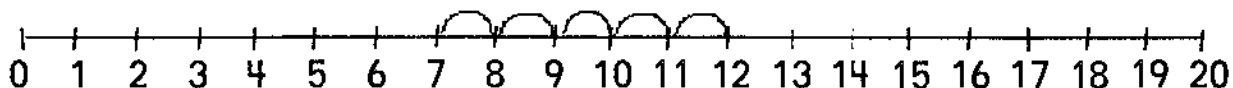
₱ _____ Hangan ngamin i bali na kapaya na?

Dose amin i bayabas ni Badong, ngem kinan di i lima a bayabas, hangan dan i natehak?



$$12 - 5 =$$

_____ Hangan dan i natehak a bayabas?

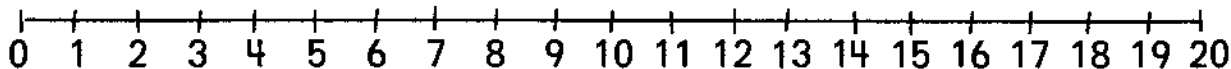


$\begin{array}{r} 12 \\ - \\ \hline 7 \end{array}$	$\begin{array}{r} 11 \\ - \\ \hline 4 \end{array}$	$\begin{array}{r} 11 \\ - \\ \hline 9 \end{array}$	$\begin{array}{r} 12 \\ - \\ \hline 6 \end{array}$	$\begin{array}{r} 13 \\ - \\ \hline 8 \end{array}$
--	--	--	--	--

Magbilang a pabaligtad onu pasoli hanggan ha esa onu awan.

20, 19, 18, _____, _____, _____, _____,
 _____, _____, _____, 10, _____, _____, _____,
 _____, _____, _____, _____, _____, 1, 0

Ide ket magsursuro kitam.



$$\begin{array}{r} 18 \\ - \\ \hline 9 \end{array}$$

$$\begin{array}{r} 14 \\ - \\ \hline 9 \end{array}$$

$$\begin{array}{r} 15 \\ - \\ \hline 6 \end{array}$$

$$\begin{array}{r} 13 \\ - \\ \hline 8 \end{array}$$

$$\begin{array}{r} 11 \\ - \\ \hline 7 \end{array}$$

$$\begin{array}{r} 12 \\ - \\ \hline 8 \end{array}$$

$$\begin{array}{r} 11 \\ - \\ \hline 3 \end{array}$$

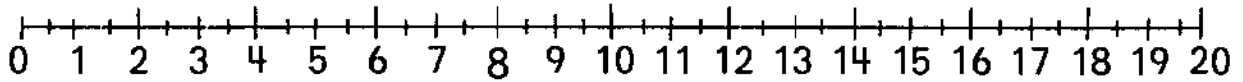
$$\begin{array}{r} 14 \\ - \\ \hline 7 \end{array}$$

Magmaynus onu adya. (Maggimet ha konahay bila ha ontok a inadal moy.) Ket magadya onu maynus. Magnakam ha numero, a maski nu anya ngem masapol a dakkal a numero iborek moy ha ontok, ken ballik ihay babba.

$$\begin{array}{r} \underline{\hspace{2cm}} \\ - \underline{\hspace{2cm}} \\ \hline \underline{\hspace{2cm}} \end{array}$$

$$\begin{array}{r} \underline{\hspace{2cm}} \\ - \underline{\hspace{2cm}} \\ \hline \underline{\hspace{2cm}} \end{array}$$

Kunahe i magbilang nu sagduduwa.



Iborek moy ha ontok bila i numero ket magbilang kam ha sagduduwa.

2	4	6	8	10
12	14	16	18	20
<u>22</u>	<u>24</u>	<u>26</u>	<u>28</u>	<u>30</u>

Hangan a sagduduwa i dyes pesos? _____


₱ _____ Bilangan moy nu hangan a sagduduwa i dyes?



Hangan a sagduduwa i bayte pesos? _____

₱ _____ Bilangam moy nu hangan a sagduduwa i bayente pesos?





Magadal kitam panggep ha kurinat. I pagborek ha baynte singko sentabos kunahe 25¢ mabalin bila a kunahe ₱.25, entan moy i tulnak . importante idi.

 = 25¢ onu ₱.25


 = 50¢ onu ₱.50

 = 
₱ 1.00


Kunahe i pagborek ha essa a peso. Atoy esa ken tulnak i umonod, ken atoy duwa a okong onu sero.

<p>1 </p> <p>_____</p>	<p>2 </p> <p>_____</p>
<p>3 </p> <p>_____</p>	<p>4 </p> <p>_____</p>


Bilangan moy nu hangan a sagpeso ken i borek ihay lingya. Kona bila ha pangahegan na.




1




2



3




4




Bilangan moy nu hangan i kurinat ide kada kahon ken iborek i tabbeg moy ihay lingyag.

1



A 10 Philippine peso banknote with serial number KV740842 is shown above a single 10 peso coin.

2




A 10 Philippine peso banknote with serial number KV740842 is shown above a single 10 peso coin.

3



A 10 Philippine peso banknote with serial number KV740842 is shown above three 10 peso coins.

4



A 20 Philippine peso banknote with serial number VM897038 is shown above three 10 peso coins.

5



A 20 Philippine peso banknote with serial number VM897038 is shown above two 10 peso coins.

6



A 10 Philippine peso banknote with serial number KV740842 is shown above a 20 Philippine peso banknote with serial number VM897038.

Bilangan moy nu hangan i kurinat ngamin i kada grupo. Ken iborek moy i tabbeg moy ha lingya.


1



2





3



Bilangan moy nu hangan ngamin i kurinat ken iborek i tabbeg moy ha lingya.



1




2



3



Bilangan moy nu hangan hidi ngamin i kurinat ken iborek i tabbeg moy ha lingya.



Magsursuro kitam ken tabbegan tam dendi ngamin ah.

$$\begin{array}{r} 5 \\ + \\ \hline 3 \end{array}$$

$$\begin{array}{r} 15 \\ + \\ \hline 3 \end{array}$$

$$\begin{array}{r} 4 \\ + \\ \hline 2 \end{array}$$

$$\begin{array}{r} 14 \\ + \\ \hline 2 \end{array}$$

$$\begin{array}{r} 8 \\ + \\ \hline 1 \end{array}$$

$$\begin{array}{r} 18 \\ + \\ \hline 1 \end{array}$$

$$\begin{array}{r} 0 \\ + \\ \hline 7 \end{array}$$

$$\begin{array}{r} 10 \\ + \\ \hline 7 \end{array}$$

$$\begin{array}{r} 21 \\ + \\ \hline 6 \end{array}$$

$$\begin{array}{r} 24 \\ + \\ \hline 4 \end{array}$$

$$\begin{array}{r} 16 \\ + \\ \hline 3 \end{array}$$

$$\begin{array}{r} 13 \\ + \\ \hline 4 \end{array}$$

$$\begin{array}{r} 23 \\ + \\ \hline 10 \end{array}$$

$$\begin{array}{r} 34 \\ + \\ \hline 13 \end{array}$$

$$\begin{array}{r} 28 \\ + \\ \hline 21 \end{array}$$

$$\begin{array}{r} 12 \\ + \\ \hline 25 \end{array}$$

Magnakam kam a numero a kayat mo maski nu anya. I tagmak mo ha ontok i dakal a numero penu idi omunod a ballik a numero hikuna i pagadya moy.

$$\begin{array}{r} \underline{\hspace{2cm}} \\ - \\ \hline \underline{\hspace{2cm}} \end{array}$$

$$\begin{array}{r} \underline{\hspace{2cm}} \\ - \\ \hline \underline{\hspace{2cm}} \end{array}$$

$$\begin{array}{r} \underline{\hspace{2cm}} \\ - \\ \hline \underline{\hspace{2cm}} \end{array}$$